

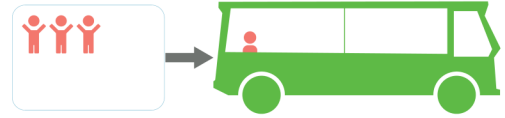
Naam: .....

Groep: .....

**Kinderen stappen in de bus. Hoeveel kinderen zitten er nu in de bus?**  
Schrijf de som op.



..... + ..... = .....



..... + ..... = .....



..... + ..... = .....



..... + ..... = .....



..... + ..... = .....



..... + ..... = .....



..... + ..... = .....



..... + ..... = .....



..... + ..... = .....



..... + ..... = .....

### Bussommen tot en met 5 [1]

Kinderen stappen in de bus. Hoeveel kinderen zitten er nu in de bus?

Schrijf de som op.



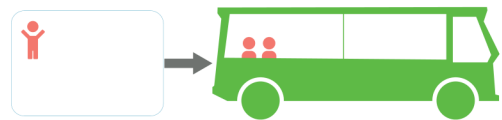
$$2 + 1 = 3$$



$$3 + 1 = 4$$



$$3 + 2 = 5$$



$$1 + 2 = 3$$



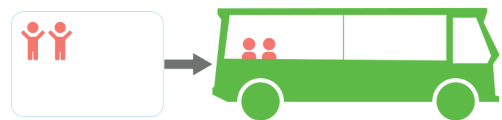
$$5 + 0 = 5$$



$$4 + 0 = 4$$



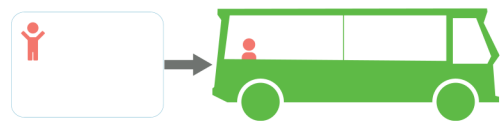
$$1 + 3 = 4$$



$$2 + 2 = 4$$



$$4 + 1 = 5$$



$$1 + 1 = 2$$