




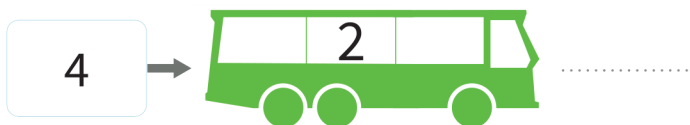



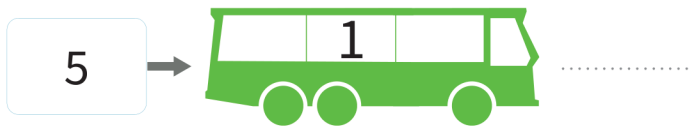

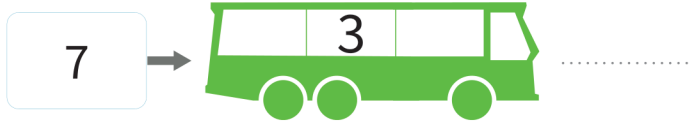
Bussommen tot en met 12 [1]

Rekenen

Naam:

Groep:

Kinderen stappen in de bus. Hoeveel kinderen zitten er nu in de bus?



Bussommen tot en met 12 [1]

Kinderen stappen in de bus. Hoeveel kinderen zitten er nu in de bus?

$7 \rightarrow \text{bus met } 3 \text{ kinderen} = 10$

$6 \rightarrow \text{bus met } 2 \text{ kinderen} = 8$

$5 \rightarrow \text{bus met } 1 \text{ kind} = 6$

$4 \rightarrow \text{bus met } 1 \text{ kind} = 5$

$12 \rightarrow \text{bus met } 0 \text{ kinderen} = 12$

$2 \rightarrow \text{bus met } 6 \text{ kinderen} = 8$

$8 \rightarrow \text{bus met } 4 \text{ kinderen} = 12$

$10 \rightarrow \text{bus met } 1 \text{ kind} = 11$

$4 \rightarrow \text{bus met } 2 \text{ kinderen} = 6$

$6 \rightarrow \text{bus met } 6 \text{ kinderen} = 12$

$3 \rightarrow \text{bus met } 4 \text{ kinderen} = 7$

$5 \rightarrow \text{bus met } 3 \text{ kinderen} = 8$

$9 \rightarrow \text{bus met } 0 \text{ kinderen} = 9$

$11 \rightarrow \text{bus met } 1 \text{ kind} = 12$