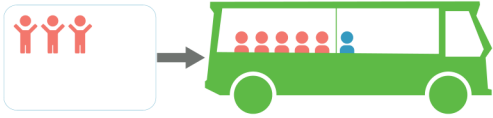


Naam:

Groep:

Kinderen stappen in de bus. Hoeveel kinderen zitten er nu in de bus?
Schrijf de som op.



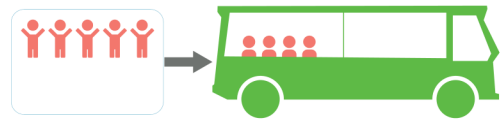
..... + =



..... + =



..... + =



..... + =



..... + =



..... + =



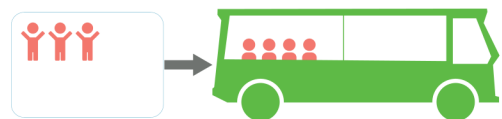
..... + =



..... + =



..... + =



..... + =

Bussommen tot en met 10 [1]

Kinderen stappen in de bus. Hoeveel kinderen zitten er nu in de bus?

Schrijf de som op.



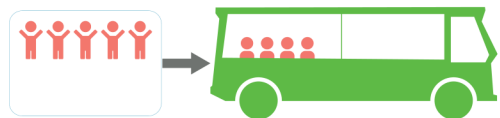
$$\underline{3} + \underline{6} = \underline{9}$$



$$\underline{6} + \underline{0} = \underline{6}$$



$$\underline{6} + \underline{2} = \underline{8}$$



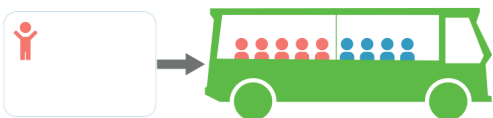
$$\underline{5} + \underline{4} = \underline{9}$$



$$\underline{4} + \underline{1} = \underline{5}$$



$$\underline{1} + \underline{2} = \underline{3}$$



$$\underline{1} + \underline{9} = \underline{10}$$



$$\underline{8} + \underline{2} = \underline{10}$$



$$\underline{2} + \underline{2} = \underline{4}$$



$$\underline{3} + \underline{4} = \underline{7}$$