



Bussommen tot en met 20 [1]

Rekenen

Naam:

Groep:

Kinderen stappen uit de bus. Hoeveel kinderen zitten er nog in de bus?



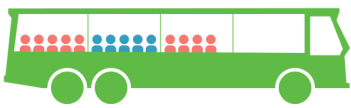
5

.....



2

.....



6

.....



1

.....



3

.....



4

.....



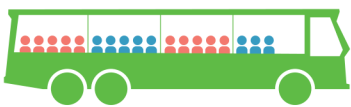
4

.....



4

.....



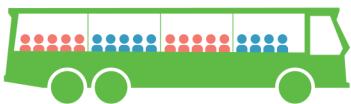
9

.....



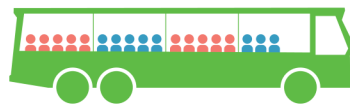
3

.....



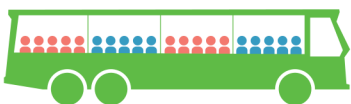
12

.....



6

.....



10

.....



7

.....

Kinderen stappen uit de bus. Hoeveel kinderen zitten er nog in de bus?



→ 5 12



→ 2 13



→ 6 8



→ 1 12



→ 3 7



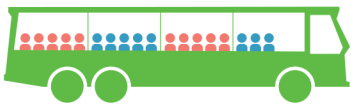
→ 4 16



→ 4 7



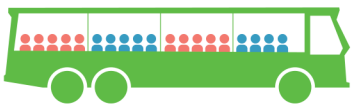
→ 4 8



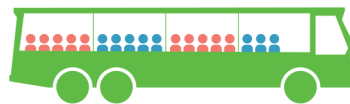
→ 9 9



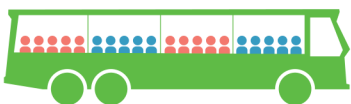
→ 3 14



→ 12 7



→ 6 12



→ 10 10



→ 7 4